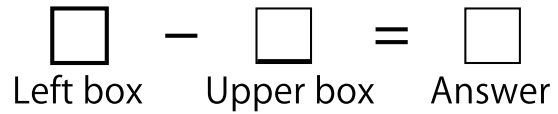


Complete the Subtraction Boxes.



①

-	4	7	6	5	0	3	2	1	8	9
12										

②

-	5	3	0	9	4	2	1	8	7	6
11										

③

-	8	7	9	3	2	1	4	0	5	6
14										

④

-	8	4	0	7	2	1	6	3	9	5
19										

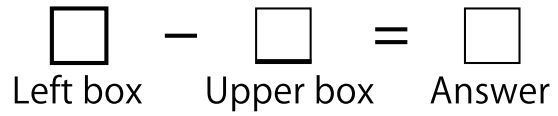
⑤

-	4	3	2	9	1	7	0	5	6	8
15										

Note

Score

Complete the Subtraction Boxes.



①

-	6	0	1	7	2	5	4	3	8	9
11										

②

-	3	8	2	0	9	5	1	6	7	4
17										

③

-	6	5	2	7	8	9	0	4	1	3
18										

④

-	1	6	5	8	9	3	7	2	4	0
15										

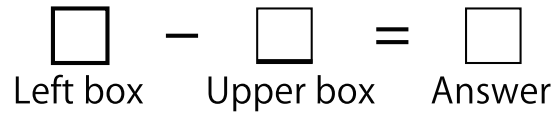
⑤

-	9	6	7	4	3	5	8	2	0	1
13										

Note

Score

Complete the Subtraction Boxes.



①

-	9	3	7	1	5	2	6	8	4	0
16										

②

-	3	4	9	6	5	7	0	8	2	1
17										

③

-	5	7	9	1	3	2	8	0	6	4
19										

④

-	0	1	8	4	3	6	2	5	9	7
18										

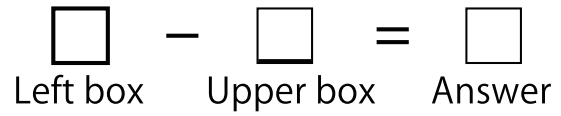
⑤

-	2	7	5	6	3	9	1	8	0	4
12										

Note

Score

Complete the Subtraction Boxes.



①

-	4	8	3	1	5	2	0	9	7	6
15										

②

-	9	5	0	3	1	4	6	2	7	8
19										

③

-	2	9	8	3	0	7	6	5	4	1
13										

④

-	2	0	7	3	5	8	1	6	4	9
17										

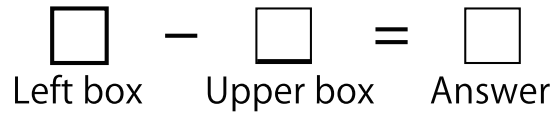
⑤

-	8	1	3	6	9	0	7	4	5	2
16										

Note

Score

Complete the Subtraction Boxes.



①

-	9	8	7	2	3	6	5	1	4	0
12										

②

-	3	1	7	2	0	9	6	5	4	8
15										

③

-	1	0	5	4	9	8	6	3	7	2
17										

④

-	3	0	5	9	4	2	7	6	1	8
14										

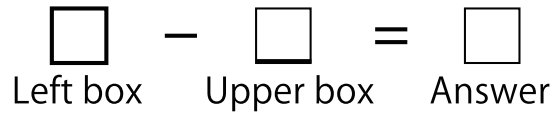
⑤

-	0	2	9	4	3	8	1	7	5	6
18										

Note

Score

Complete the Subtraction Boxes.



①

-	3	5	1	2	4	6	7	9	8	0
16										

②

-	2	9	4	5	6	8	0	1	7	3
14										

③

-	4	0	5	9	1	2	7	8	3	6
12										

④

-	8	3	5	4	7	0	6	1	2	9
17										


⑤

-	4	0	5	8	7	2	1	6	3	9
18										

Note

Score

Complete the Subtraction Boxes.



①

-	6	5	0	1	8	9	2	3	4	7
18										

②

-	5	0	3	1	9	2	4	8	6	7
17										

③

-	8	4	6	0	1	9	2	3	7	5
11										

④

-	4	5	3	0	7	1	2	6	8	9
14										


⑤

-	8	6	0	2	1	5	4	7	9	3
16										

Note

Score

Complete the Subtraction Boxes.



①

-	9	6	2	8	5	0	3	1	7	4
15										

②

-	5	8	2	9	6	1	3	7	0	4
18										

③

-	9	1	7	5	0	4	8	3	2	6
17										

④

-	7	5	9	0	3	2	4	8	6	1
11										

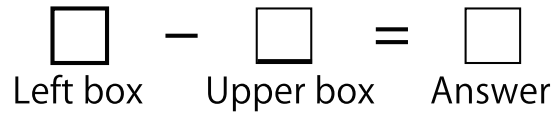
⑤

-	0	3	5	6	2	1	8	7	4	9
16										

Note

Score

Complete the Subtraction Boxes.



①

-	3	5	8	7	0	6	2	9	4	1
16										

②

-	5	2	7	1	6	3	0	9	4	8
15										

③

-	4	2	5	9	0	1	7	6	8	3
12										

④

-	3	8	4	0	5	9	1	7	6	2
18										

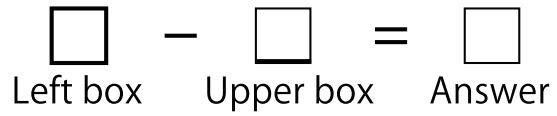
⑤

-	8	6	4	7	0	3	1	9	2	5
13										

Note

Score

Complete the Subtraction Boxes.



①

-	4	3	5	2	7	8	0	1	9	6
14										

②

-	3	2	9	8	0	6	5	1	7	4
12										

③

-	6	4	0	8	9	7	3	2	5	1
18										

④

-	8	1	6	3	2	9	5	7	4	0
13										

⑤

-	0	1	4	2	5	7	8	3	9	6
17										

Note

Score

Complete the Subtraction Boxes.

$$\square - \square = \square$$

Left box Upper box Answer

①

-	4	7	6	5	0	3	2	1	8	9
12	8	5	6	7	12	9	10	11	4	3

②

-	5	3	0	9	4	2	1	8	7	6
11	6	8	11	2	7	9	10	3	4	5

③

-	8	7	9	3	2	1	4	0	5	6
14	6	7	5	11	12	13	10	14	9	8

④

-	8	4	0	7	2	1	6	3	9	5
19	11	15	19	12	17	18	13	16	10	14

⑤

-	4	3	2	9	1	7	0	5	6	8
15	11	12	13	6	14	8	15	10	9	7

Complete the Subtraction Boxes.

$$\square - \square = \square$$

Left box Upper box Answer

①

-	6	0	1	7	2	5	4	3	8	9
11	5	11	10	4	9	6	7	8	3	2

②

-	3	8	2	0	9	5	1	6	7	4
17	14	9	15	17	8	12	16	11	10	13

③

-	6	5	2	7	8	9	0	4	1	3
18	12	13	16	11	10	9	18	14	17	15

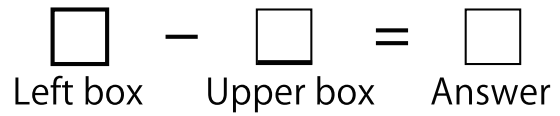
④

-	1	6	5	8	9	3	7	2	4	0
15	14	9	10	7	6	12	8	13	11	15

⑤

-	9	6	7	4	3	5	8	2	0	1
13	4	7	6	9	10	8	5	11	13	12

Complete the Subtraction Boxes.



①

-	9	3	7	1	5	2	6	8	4	0
16	7	13	9	15	11	14	10	8	12	16

②

-	3	4	9	6	5	7	0	8	2	1
17	14	13	8	11	12	10	17	9	15	16

③

-	5	7	9	1	3	2	8	0	6	4
19	14	12	10	18	16	17	11	19	13	15

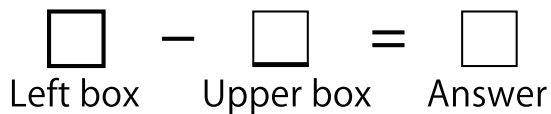
④

-	0	1	8	4	3	6	2	5	9	7
18	18	17	10	14	15	12	16	13	9	11

⑤

-	2	7	5	6	3	9	1	8	0	4
12	10	5	7	6	9	3	11	4	12	8

Complete the Subtraction Boxes.



①

-	4	8	3	1	5	2	0	9	7	6
15	11	7	12	14	10	13	15	6	8	9

②

-	9	5	0	3	1	4	6	2	7	8
19	10	14	19	16	18	15	13	17	12	11

③

-	2	9	8	3	0	7	6	5	4	1
13	11	4	5	10	13	6	7	8	9	12

④

-	2	0	7	3	5	8	1	6	4	9
17	15	17	10	14	12	9	16	11	13	8

⑤

-	8	1	3	6	9	0	7	4	5	2
16	8	15	13	10	7	16	9	12	11	14

Complete the Subtraction Boxes.

$$\square - \square = \square$$

Left box Upper box Answer

①

-	9	8	7	2	3	6	5	1	4	0
12	3	4	5	10	9	6	7	11	8	12

②

-	3	1	7	2	0	9	6	5	4	8
15	12	14	8	13	15	6	9	10	11	7

③

-	1	0	5	4	9	8	6	3	7	2
17	16	17	12	13	8	9	11	14	10	15


④

-	3	0	5	9	4	2	7	6	1	8
14	11	14	9	5	10	12	7	8	13	6

⑤

-	0	2	9	4	3	8	1	7	5	6
18	18	16	9	14	15	10	17	11	13	12

Complete the Subtraction Boxes.



①

-	3	5	1	2	4	6	7	9	8	0
16	13	11	15	14	12	10	9	7	8	16

②

-	2	9	4	5	6	8	0	1	7	3
14	12	5	10	9	8	6	14	13	7	11

③

-	4	0	5	9	1	2	7	8	3	6
12	8	12	7	3	11	10	5	4	9	6

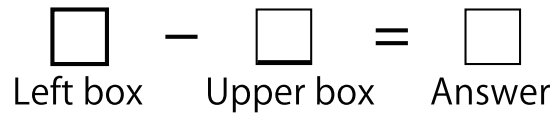
④

-	8	3	5	4	7	0	6	1	2	9
17	9	14	12	13	10	17	11	16	15	8

⑤

-	4	0	5	8	7	2	1	6	3	9
18	14	18	13	10	11	16	17	12	15	9

Complete the Subtraction Boxes.



①

-	6	5	0	1	8	9	2	3	4	7
18	12	13	18	17	10	9	16	15	14	11

②

-	5	0	3	1	9	2	4	8	6	7
17	12	17	14	16	8	15	13	9	11	10

③

-	8	4	6	0	1	9	2	3	7	5
11	3	7	5	11	10	2	9	8	4	6

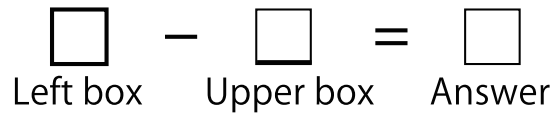
④

-	4	5	3	0	7	1	2	6	8	9
14	10	9	11	14	7	13	12	8	6	5

⑤

-	8	6	0	2	1	5	4	7	9	3
16	8	10	16	14	15	11	12	9	7	13

Complete the Subtraction Boxes.



①

-	9	6	2	8	5	0	3	1	7	4
15	6	9	13	7	10	15	12	14	8	11

②

-	5	8	2	9	6	1	3	7	0	4
18	13	10	16	9	12	17	15	11	18	14

③

-	9	1	7	5	0	4	8	3	2	6
17	8	16	10	12	17	13	9	14	15	11


④

-	7	5	9	0	3	2	4	8	6	1
11	4	6	2	11	8	9	7	3	5	10

⑤

-	0	3	5	6	2	1	8	7	4	9
16	16	13	11	10	14	15	8	9	12	7

Complete the Subtraction Boxes.



①

-	3	5	8	7	0	6	2	9	4	1
16	13	11	8	9	16	10	14	7	12	15

②

-	5	2	7	1	6	3	0	9	4	8
15	10	13	8	14	9	12	15	6	11	7

③

-	4	2	5	9	0	1	7	6	8	3
12	8	10	7	3	12	11	5	6	4	9

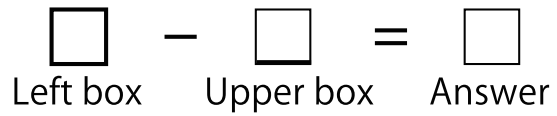
④

-	3	8	4	0	5	9	1	7	6	2
18	15	10	14	18	13	9	17	11	12	16

⑤

-	8	6	4	7	0	3	1	9	2	5
13	5	7	9	6	13	10	12	4	11	8

Complete the Subtraction Boxes.



①

-	4	3	5	2	7	8	0	1	9	6
14	10	11	9	12	7	6	14	13	5	8

②

-	3	2	9	8	0	6	5	1	7	4
12	9	10	3	4	12	6	7	11	5	8

③

-	6	4	0	8	9	7	3	2	5	1
18	12	14	18	10	9	11	15	16	13	17

④

-	8	1	6	3	2	9	5	7	4	0
13	5	12	7	10	11	4	8	6	9	13

⑤

-	0	1	4	2	5	7	8	3	9	6
17	17	16	13	15	12	10	9	14	8	11