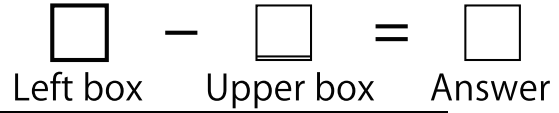


Complete the Subtraction Boxes.



-	1	7	9	8	4	3	2	6	5
9									

-	8	6	2	1	4	3	7	5
8								

-	2	1	4	3	6	5	7
7							

-	4	3	2	1	6	5
6						

-	3	4	5	2	1
5					

-	2	1	3	4
4				

-	2	3	1
3			


-	1	2
2		

-	1
1	

Note \_\_\_\_\_

Score \_\_\_\_\_

Complete the Subtraction Boxes.



Left box      Upper box      Answer

-	8	9	4	7	3	5	6	2	1
9									

-	2	6	3	7	5	1	8	4
8								

-	2	3	4	6	1	7	5
7							

-	5	3	2	1	6	4
6						

-	4	3	5	1	2
5					

-	1	3	4	2
4				

-	3	2	1
3			


-	2	1
2		

-	1
1	

Note \_\_\_\_\_

Score \_\_\_\_\_

Complete the Subtraction Boxes.



Left box      Upper box      Answer

-	7	8	2	5	6	9	3	1	4
9									

-	2	1	8	4	3	7	6	5
8								

-	5	3	7	2	4	6	1
7							

-	2	6	3	4	1	5
6						

-	3	4	1	5	2
5					

-	4	3	1	2
4				

-	1	3	2
3			

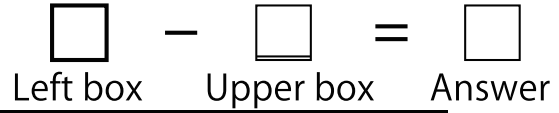
-	1	2
2		

-	1
1	

Note \_\_\_\_\_

Score \_\_\_\_\_

Complete the Subtraction Boxes.



-	2	1	3	5	7	6	4	8	9
9									

-	1	6	4	3	7	5	2	8
8								

-	1	5	3	2	4	6	7
7							

-	3	4	1	5	6	2
6						

-	4	1	2	5	3
5					

-	1	3	4	2
4				

-	1	2	3
3			

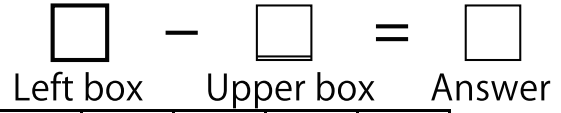
-	2	1
2		

-	1
1	

Note \_\_\_\_\_

Score \_\_\_\_\_

Complete the Subtraction Boxes.



-	3	2	5	8	1	6	9	4	7
9									

-	1	6	7	8	3	2	5	4
8								

-	6	3	4	5	7	2	1
7							

-	5	4	6	1	3	2
6						

-	2	4	5	1	3
5					

-	2	3	1	4
4				

-	1	3	2
3			

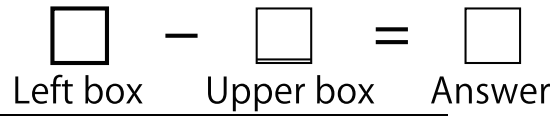
-	2	1
2		

-	1
1	

Note \_\_\_\_\_

Score \_\_\_\_\_

Complete the Subtraction Boxes.



-	7	9	3	8	5	4	1	2	6
9									

-	8	3	4	6	1	5	7	2
8								

-	6	7	5	4	1	3	2
7							

-	2	1	6	4	5	3
6						

-	1	5	2	3	4
5					

-	1	2	4	3
4				

-	2	3	1
3			


-	1	2
2		

-	1
1	

Note \_\_\_\_\_

Score \_\_\_\_\_

Complete the Subtraction Boxes.



Left box      Upper box      Answer

-	2	4	6	5	1	7	8	9	3
9									

-	1	4	6	8	5	3	7	2
8								

-	7	1	4	5	2	6	3
7							

-	6	3	5	1	2	4
6						

-	5	2	3	1	4
5					

-	2	3	4	1
4				

-	2	1	3
3			

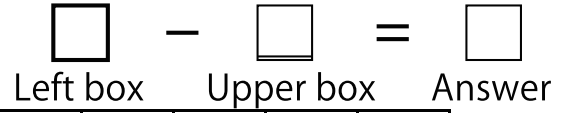
-	2	1
2		

-	1
1	

Note \_\_\_\_\_

Score \_\_\_\_\_

Complete the Subtraction Boxes.



-	7	4	6	1	5	8	3	9	2
9									

-	2	1	5	8	7	6	3	4
8								

-	4	2	5	7	6	1	3
7							

-	4	2	5	1	6	3
6						

-	2	1	5	3	4
5					

-	1	3	2	4
4				

-	2	3	1
3			

-	2	1
2		

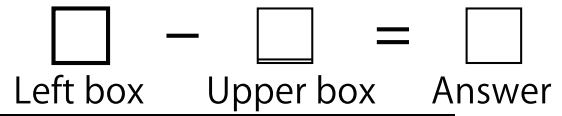
-	1
1	

Note \_\_\_\_\_

Score \_\_\_\_\_



Complete the Subtraction Boxes.



-	3	5	2	6	7	1	8	9	4
9									

-	4	8	3	2	6	1	5	7
8								

-	4	5	1	7	3	2	6
7							

-	4	5	2	6	1	3
6						

-	5	4	2	3	1
5					

-	3	2	1	4
4				

-	2	1	3
3			

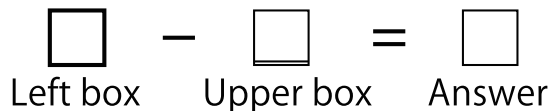
-	1	2
2		

-	1
1	

Note \_\_\_\_\_

Score \_\_\_\_\_

Complete the Subtraction Boxes.



-	6	4	2	8	7	9	1	3	5
9									

-	6	5	4	1	7	2	3	8
8								

-	7	5	3	6	1	2	4
7							

-	2	3	1	6	4	5
6						

-	1	3	2	5	4
5					

-	4	1	2	3
4				

-	1	3	2
3			

-	1	2
2		

-	1
1	

Note \_\_\_\_\_

Score \_\_\_\_\_

Complete the Subtraction Boxes.

$$\square - \square = \square$$

					Left box		Upper box		Answer
-	1	7	9	8	4	3	2	6	5
9	8	2	0	1	5	6	7	3	4
-	8	6	2	1	4	3	7	5	
8	0	2	6	7	4	5	1	3	
-	2	1	4	3	6	5	7		
7	5	6	3	4	1	2	0		
-	4	3	2	1	6	5			
6	2	3	4	5	0	1			
-	3	4	5	2	1				
5	2	1	0	3	4				
-	2	1	3	4					
4	2	3	1	0					
-	2	3	1						
3	1	0	2						
-	1	2							
2	1	0							
-	1								
1	0								

Complete the Subtraction Boxes.

$$\square - \square = \square$$

					Left box	Upper box	Answer		
-	8	9	4	7	3	5	6	2	1
9	1	0	5	2	6	4	3	7	8
-	2	6	3	7	5	1	8	4	
8	6	2	5	1	3	7	0	4	
-	2	3	4	6	1	7	5		
7	5	4	3	1	6	0	2		
-	5	3	2	1	6	4			
6	1	3	4	5	0	2			
-	4	3	5	1	2				
5	1	2	0	4	3				
-	1	3	4	2					
4	3	1	0	2					
-	3	2	1						
3	0	1	2						
-	2	1							
2	0	1							
-	1								
1	0								

Complete the Subtraction Boxes.

$$\square - \square = \square$$

	Left box	Upper box	Answer
-	7	8	2
9	2	1	7
-	5	6	9
3	1	4	4
-	2	1	8
8	6	7	0
-	4	3	7
6	5	1	2
-	3	4	3
7	2	4	0
-	2	6	3
6	4	0	3
-	4	3	1
5	2	1	4
-	5	2	4
3	1	4	0
-	3	4	1
5	2	1	4
-	4	3	1
4	0	1	3
-	1	3	2
3	2	0	1
-	1	2	
2	1	0	
-	1		
1	0		

Complete the Subtraction Boxes.

$$\square - \square = \square$$

	Left box	Upper box	Answer
-	2	1	3
9	7	8	6
-	5	7	6
4	8	9	0
-	1	6	4
8	7	2	4
-	3	7	5
2	8	0	
-	1	5	3
7	6	2	4
-	2	4	5
3	1	3	1
-	4	6	7
0			
-	3	4	1
6	3	2	5
-	5	1	0
4			
-	4	1	2
5	1	4	3
-	5	0	2
-	1	3	4
2			
-	1	2	3
4	3	1	0
-	2	1	
2	0	1	
-	1		
1	0		

Complete the Subtraction Boxes.

$$\square - \square = \square$$

					Left box	Upper box	Answer
-	3	2	5	8	1	6	9
9	6	7	4	1	8	3	0
-	1	6	7	8	3	2	5
8	7	2	1	0	5	6	3
-	6	3	4	5	7	2	1
7	1	4	3	2	0	5	6
-	5	4	6	1	3	2	
6	1	2	0	5	3	4	
-	2	4	5	1	3		
5	3	1	0	4	2		
-	2	3	1	4			
4	2	1	3	0			
-	1	3	2				
3	2	0	1				
-	2	1					
2	0	1					
-	1						
1	0						

Complete the Subtraction Boxes.

$$\square - \square = \square$$

-	7	9	3	8	5	4	1	2	6
9	2	0	6	1	4	5	8	7	3

-	8	3	4	6	1	5	7	2
8	0	5	4	2	7	3	1	6

-	6	7	5	4	1	3	2
7	1	0	2	3	6	4	5

-	2	1	6	4	5	3
6	4	5	0	2	1	3

-	1	5	2	3	4
5	4	0	3	2	1

-	1	2	4	3
4	3	2	0	1

-	2	3	1
3	1	0	2

-	1	2
2	1	0

-	1
1	0



Complete the Subtraction Boxes.

$$\square - \square = \square$$

	Left box	Upper box	Answer
-	2	4	6
9	7	5	3
-	5	1	7
8	2	1	0
-	1	4	6
8	7	4	2
-	8	5	3
7	0	3	5
-	7	1	4
7	0	6	3
-	5	2	6
5	0	3	5
-	6	3	5
6	0	3	1
-	5	2	3
5	0	3	2
-	2	3	4
4	2	1	0
-	2	1	3
3	1	2	0
-	2	1	
2	0	1	
-	1		
1	0		



Complete the Subtraction Boxes.

$$\square - \square = \square$$

					Left box		Upper box		Answer
-	7	4	6	1	5	8	3	9	2
9	2	5	3	8	4	1	6	0	7
-	2	1	5	8	7	6	3	4	
8	6	7	3	0	1	2	5	4	
-	4	2	5	7	6	1	3		
7	3	5	2	0	1	6	4		
-	4	2	5	1	6	3			
6	2	4	1	5	0	3			
-	2	1	5	3	4				
5	3	4	0	2	1				
-	1	3	2	4					
4	3	1	2	0					
-	2	3	1						
3	1	0	2						
-	2	1							
2	0	1							
-	1								
1	0								

Complete the Subtraction Boxes.

$$\square - \square = \square$$

					Left box		Upper box		Answer
-	3	5	2	6	7	1	8	9	4
9	6	4	7	3	2	8	1	0	5
-	4	8	3	2	6	1	5	7	
8	4	0	5	6	2	7	3	1	
-	4	5	1	7	3	2	6		
7	3	2	6	0	4	5	1		
-	4	5	2	6	1	3			
6	2	1	4	0	5	3			
-	5	4	2	3	1				
5	0	1	3	2	4				
-	3	2	1	4					
4	1	2	3	0					
-	2	1	3						
3	1	2	0						
-	1	2							
2	1	0							
-	1								
1	0								

Complete the Subtraction Boxes.

$$\square - \square = \square$$

	Left box	Upper box	Answer
-	6	4	2
8	7	9	1
3	5	7	1
2	0	8	6
4			5
-	6	5	4
1	7	2	3
8	2	3	4
7	1	6	5
0			8
-	7	5	3
6	1	2	4
7	0	4	1
6	6	5	3
-	2	3	1
6	4	3	5
0	2	1	
-	1	3	2
5	4	2	3
0			1
-	4	1	2
4	0	3	2
			1
-	1	3	2
3	2	0	1
-	1	2	
2	1	0	
-	1		
1	0		