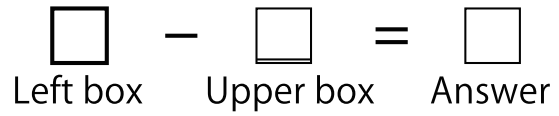


Complete the Subtraction Boxes.



-	3	1	9	5	4	6	7	8	2
9									

-	3	4	2	6	1	8	5	7
8								

-	1	6	5	4	7	2	3
7							

-	4	1	2	5	3	6
6						

-	2	1	3	5	4
5					

-	4	2	3	1
4				

-	2	3	1
3			


-	1	2
2		

-	1
1	

Note _____

Score _____

Complete the Subtraction Boxes.



-	8	9	5	1	2	6	3	7	4
9									

-	2	7	1	4	8	6	5	3
8								

-	7	1	3	6	5	4	2
7							

-	4	2	5	3	6	1
6						

-	5	1	3	4	2
5					

-	2	3	1	4
4				

-	3	1	2
3			


-	2	1
2		

-	1
1	

Note _____

Score _____

Complete the Subtraction Boxes.



-	2	9	6	4	7	5	1	8	3
9									

-	5	6	2	4	8	3	1	7
8								

-	4	1	6	2	3	5	7
7							

-	2	1	6	4	3	5
6						

-	3	1	5	4	2
5					

-	4	3	1	2
4				

-	1	3	2
3			

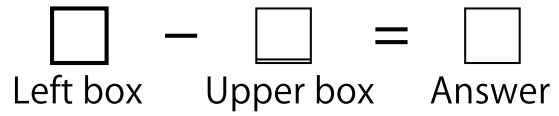
-	2	1
2		

-	1
1	

Note _____

Score _____

Complete the Subtraction Boxes.



-	8	7	3	4	5	1	9	2	6
9									

-	4	6	1	7	8	2	5	3
8								

-	1	4	3	6	7	5	2
7							

-	3	5	2	6	4	1
6						

-	4	5	1	2	3
5					

-	1	2	4	3
4				

-	1	3	2
3			


-	1	2
2		

-	1
1	

Note _____

Score _____

Complete the Subtraction Boxes.



-	7	8	3	2	1	6	9	5	4
9									

-	2	6	3	7	1	4	8	5
8								

-	4	7	6	1	5	3	2
7							

-	6	5	1	4	2	3
6						

-	2	3	1	5	4
5					

-	4	1	3	2
4				

-	1	2	3
3			

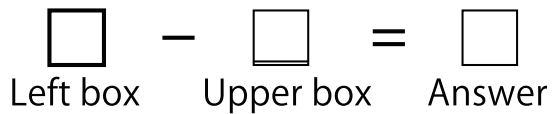
-	1	2
2		

-	1
1	

Note _____

Score _____

Complete the Subtraction Boxes.



-	2	4	5	3	8	9	1	6	7
9									

-	4	8	6	1	3	2	7	5
8								

-	2	1	6	7	3	4	5
7							

-	5	2	6	4	3	1
6						

-	4	3	5	2	1
5					

-	1	2	4	3
4				

-	1	3	2
3			

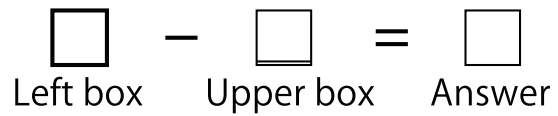
-	1	2
2		

-	1
1	

Note _____

Score _____

Complete the Subtraction Boxes.



-	1	3	7	8	4	6	9	5	2
9									

-	5	8	6	2	4	3	7	1
8								

-	1	4	2	5	3	6	7
7							

-	3	4	1	2	6	5
6						

-	2	4	5	3	1
5					

-	2	1	4	3
4				

-	3	1	2
3			

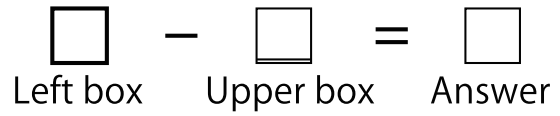
-	2	1
2		

-	1
1	

Note _____

Score _____

Complete the Subtraction Boxes.



-	7	8	3	6	2	1	5	9	4
9									

-	1	5	7	6	8	2	3	4
8								

-	4	1	6	2	5	3	7
7							

-	1	4	3	5	2	6
6						

-	1	4	3	5	2
5					

-	4	1	2	3
4				

-	1	2	3
3			


-	1	2
2		

-	1
1	

Note _____

Score _____

Complete the Subtraction Boxes.



-	2	4	3	1	5	7	6	8	9
9									

-	7	4	8	3	5	6	2	1
8								

-	5	6	7	2	4	1	3
7							

-	5	3	6	2	1	4
6						

-	2	5	4	3	1
5					

-	3	4	2	1
4				

-	1	3	2
3			


-	2	1
2		

-	1
1	

Note _____

Score _____

Complete the Subtraction Boxes.



-	7	5	9	4	1	2	6	8	3
9									

-	5	2	6	7	3	1	8	4
8								

-	1	7	2	4	5	6	3
7							

-	2	3	1	4	5	6
6						

-	2	4	3	5	1
5					

-	4	2	3	1
4				

-	3	1	2
3			


-	1	2
2		

-	1
1	

Note _____

Score _____

Complete the Subtraction Boxes.



-	3	1	9	5	4	6	7	8	2
9	6	8	0	4	5	3	2	1	7

-	3	4	2	6	1	8	5	7
8	5	4	6	2	7	0	3	1

-	1	6	5	4	7	2	3
7	6	1	2	3	0	5	4

-	4	1	2	5	3	6
6	2	5	4	1	3	0

-	2	1	3	5	4
5	3	4	2	0	1

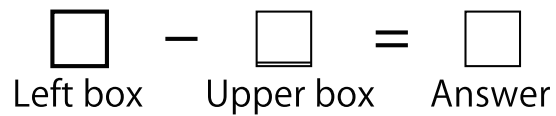
-	4	2	3	1
4	0	2	1	3

-	2	3	1
3	1	0	2

-	1	2
2	1	0

-	1
1	0

Complete the Subtraction Boxes.



-	8	9	5	1	2	6	3	7	4
9	1	0	4	8	7	3	6	2	5

-	2	7	1	4	8	6	5	3
8	6	1	7	4	0	2	3	5

-	7	1	3	6	5	4	2
7	0	6	4	1	2	3	5

-	4	2	5	3	6	1
6	2	4	1	3	0	5

-	5	1	3	4	2
5	0	4	2	1	3

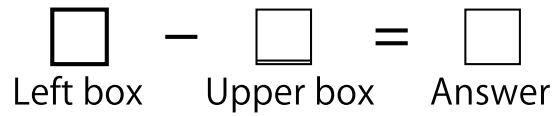
-	2	3	1	4
4	2	1	3	0

-	3	1	2
3	0	2	1

-	2	1
2	0	1

-	1
1	0

Complete the Subtraction Boxes.



-	2	9	6	4	7	5	1	8	3
9	7	0	3	5	2	4	8	1	6

-	5	6	2	4	8	3	1	7
8	3	2	6	4	0	5	7	1

-	4	1	6	2	3	5	7
7	3	6	1	5	4	2	0

-	2	1	6	4	3	5
6	4	5	0	2	3	1

-	3	1	5	4	2
5	2	4	0	1	3

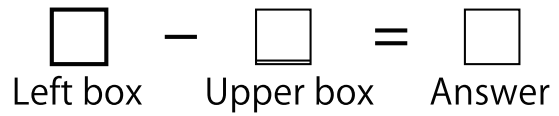
-	4	3	1	2
4	0	1	3	2

-	1	3	2
3	2	0	1

-	2	1
2	0	1

-	1
1	0

Complete the Subtraction Boxes.



-	8	7	3	4	5	1	9	2	6
9	1	2	6	5	4	8	0	7	3

-	4	6	1	7	8	2	5	3
8	4	2	7	1	0	6	3	5

-	1	4	3	6	7	5	2
7	6	3	4	1	0	2	5

-	3	5	2	6	4	1
6	3	1	4	0	2	5

-	4	5	1	2	3
5	1	0	4	3	2

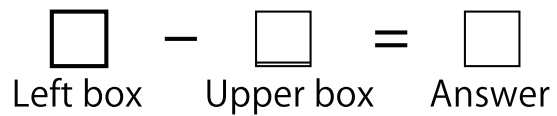
-	1	2	4	3
4	3	2	0	1

-	1	3	2
3	2	0	1

-	1	2
2	1	0

-	1
1	0

Complete the Subtraction Boxes.



-	7	8	3	2	1	6	9	5	4
9	2	1	6	7	8	3	0	4	5

-	2	6	3	7	1	4	8	5
8	6	2	5	1	7	4	0	3

-	4	7	6	1	5	3	2
7	3	0	1	6	2	4	5

-	6	5	1	4	2	3
6	0	1	5	2	4	3

-	2	3	1	5	4
5	3	2	4	0	1

-	4	1	3	2
4	0	3	1	2

-	1	2	3
3	2	1	0

-	1	2
2	1	0

-	1
1	0

Complete the Subtraction Boxes.

$\square - \square = \square$
 Left box Upper box Answer

-	2	4	5	3	8	9	1	6	7
9	7	5	4	6	1	0	8	3	2

-	4	8	6	1	3	2	7	5
8	4	0	2	7	5	6	1	3

-	2	1	6	7	3	4	5
7	5	6	1	0	4	3	2

-	5	2	6	4	3	1
6	1	4	0	2	3	5

-	4	3	5	2	1
5	1	2	0	3	4

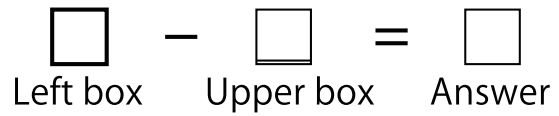
-	1	2	4	3
4	3	2	0	1

-	1	3	2
3	2	0	1

-	1	2
2	1	0

-	1
1	0

Complete the Subtraction Boxes.



-	1	3	7	8	4	6	9	5	2
9	8	6	2	1	5	3	0	4	7

-	5	8	6	2	4	3	7	1
8	3	0	2	6	4	5	1	7

-	1	4	2	5	3	6	7
7	6	3	5	2	4	1	0

-	3	4	1	2	6	5
6	3	2	5	4	0	1

-	2	4	5	3	1
5	3	1	0	2	4

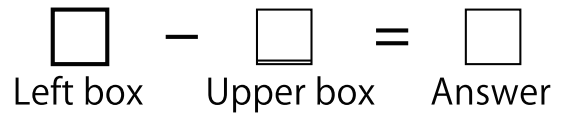
-	2	1	4	3
4	2	3	0	1

-	3	1	2
3	0	2	1

-	2	1
2	0	1

-	1
1	0

Complete the Subtraction Boxes.



-	7	8	3	6	2	1	5	9	4
9	2	1	6	3	7	8	4	0	5

-	1	5	7	6	8	2	3	4
8	7	3	1	2	0	6	5	4

-	4	1	6	2	5	3	7
7	3	6	1	5	2	4	0

-	1	4	3	5	2	6
6	5	2	3	1	4	0

-	1	4	3	5	2
5	4	1	2	0	3

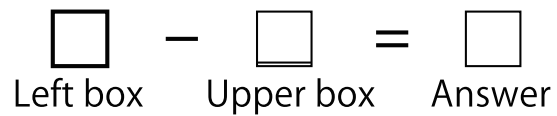
-	4	1	2	3
4	0	3	2	1

-	1	2	3
3	2	1	0

-	1	2
2	1	0

-	1
1	0

Complete the Subtraction Boxes.



-	2	4	3	1	5	7	6	8	9
9	7	5	6	8	4	2	3	1	0

-	7	4	8	3	5	6	2	1
8	1	4	0	5	3	2	6	7

-	5	6	7	2	4	1	3
7	2	1	0	5	3	6	4

-	5	3	6	2	1	4
6	1	3	0	4	5	2

-	2	5	4	3	1
5	3	0	1	2	4


-	3	4	2	1
4	1	0	2	3

-	1	3	2
3	2	0	1

-	2	1
2	0	1

-	1
1	0

Complete the Subtraction Boxes.



-	7	5	9	4	1	2	6	8	3
9	2	4	0	5	8	7	3	1	6

-	5	2	6	7	3	1	8	4
8	3	6	2	1	5	7	0	4

-	1	7	2	4	5	6	3
7	6	0	5	3	2	1	4

-	2	3	1	4	5	6
6	4	3	5	2	1	0

-	2	4	3	5	1
5	3	1	2	0	4

-	4	2	3	1
4	0	2	1	3

-	3	1	2
3	0	2	1

-	1	2
2	1	0

-	1
1	0